


Name: \_\_\_\_\_ Date: \_\_\_\_\_

Fill in the blanks using the word bank.

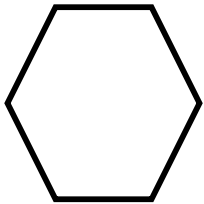
Triangle

Vertices


Sides



A circle does not have any \_\_\_\_\_.




This hexagon has 6 \_\_\_\_\_.

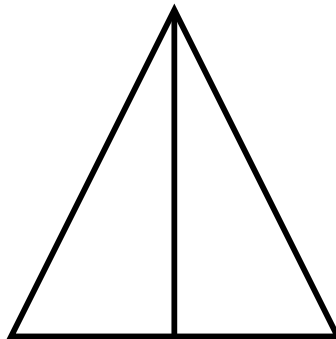


This three sided shape is called a \_\_\_\_\_.

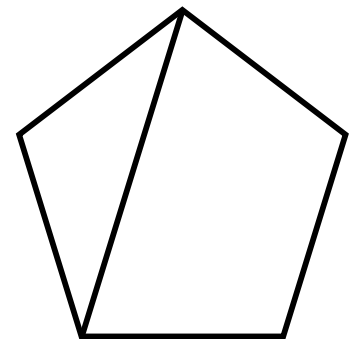
Decide if each shape is divided into EQUAL or UNEQUAL parts.



\_\_\_\_\_



\_\_\_\_\_



\_\_\_\_\_