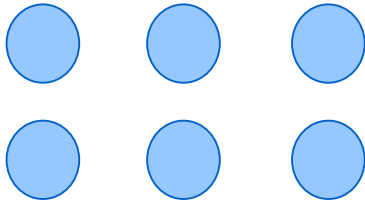


Rows, columns & arrays

Grade 2 Multiplication Worksheet

Fill in the blanks.



2 rows of **3**

$$2 \times 3 = 6$$




_____ rows of _____

$$\text{_____} \times \text{_____} = \text{_____}$$




_____ rows of _____

$$\text{_____} \times \text{_____} = \text{_____}$$



_____ rows of _____

$$\text{_____} \times \text{_____} = \text{_____}$$



_____ rows of _____

$$\text{_____} \times \text{_____} = \text{_____}$$



_____ rows of _____

$$\text{_____} \times \text{_____} = \text{_____}$$