


Name: _____

Directions: Decompose each number from standard form to expanded form. Sketch the number in base ten blocks.



hundreds



tens




ones

4. _____ + _____ + _____ = 404


1. _____ + _____ + _____ = 234

5. _____ + _____ + _____ = 330



2. _____ + _____ + _____ = 387

6. _____ + _____ + _____ = 456



3. _____ + _____ + _____ = 111

7. _____ + _____ + _____ = 299

