


Name: _____

Ordering numbers

Write the numbers in order from **greatest** to **least**.




34

104

94

14

_____ > _____ > _____ > _____




5

91

36

29

_____ > _____ > _____ > _____




21

38

14

8

_____ > _____ > _____ > _____




108

116

120

100

_____ > _____ > _____ > _____



45

80

74

46

_____ > _____ > _____ > _____