


Lines, Rays and Line segments

Choose the correct option.

1) Which of these figures is a line segment?



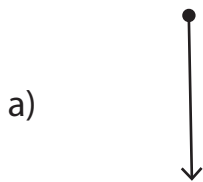
2) Which of the following is a line?



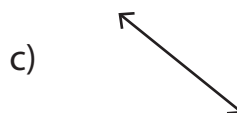
3) Which of these figures is a ray?



4) Which of the following is a line segment?



5) Which of the following is a ray?



6) Which of these figures is a line?

