



Identifying “halves” and “quarters”

Grade 1 Fractions Worksheet

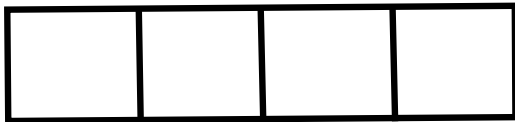
Is the shape split into halves or quarters? Circle the correct answer.




Halves / Quarters



Halves / Quarters




Halves / Quarters




Halves / Quarters



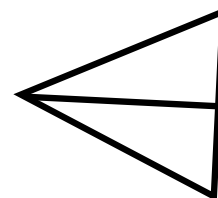
Halves / Quarters



Halves / Quarters



Halves / Quarters



Halves / Quarters