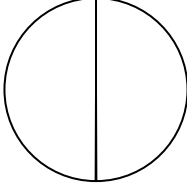
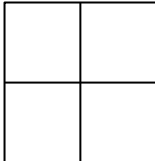
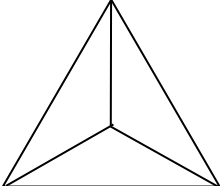
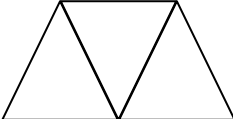
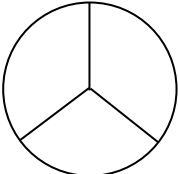
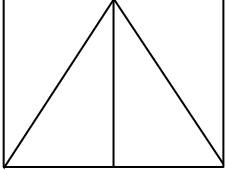
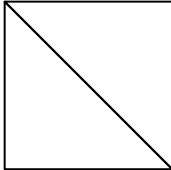
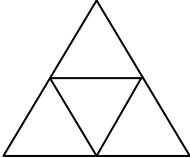


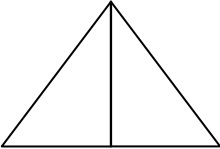
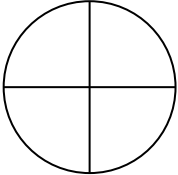


## Identify halves, thirds and quarters

### Grade 2 Fractions Worksheet

Circle the correct answer for each shape.

|                                                                                     |                                                                                     |                                                                                       |
|-------------------------------------------------------------------------------------|-------------------------------------------------------------------------------------|---------------------------------------------------------------------------------------|
|    |    |    |
| Halves / Thirds /<br>Quarters                                                       | Halves / Thirds /<br>Quarters                                                       | Halves / Thirds /<br>Quarters                                                         |
|    |    |    |
| Halves / Thirds /<br>Quarters                                                       | Halves / Thirds /<br>Quarters                                                       | Halves / Thirds /<br>Quarters                                                         |
|  |  |  |
| Halves / Thirds /<br>Quarters                                                       | Halves / Thirds /<br>Quarters                                                       | Halves / Thirds /<br>Quarters                                                         |
|  |  |  |
| Halves / Thirds /<br>Quarters                                                       | Halves / Thirds /<br>Quarters                                                       | Halves / Thirds /<br>Quarters                                                         |