


Name _____

Count & Graph

Count each group of pictures. Color in the boxes below to make a graph of the results.



7				
6				
5				
4				
3				
2				
1				




Name _____


Count & Graph - Questions

Use the graph you made to answer the questions.

1. Which one has the most pictures?



2. Which one has the least pictures?



3. How many  are there? _____

4. How many  and  are there together? _____

5. How many more  than ? _____

6. How many pictures in all? _____

