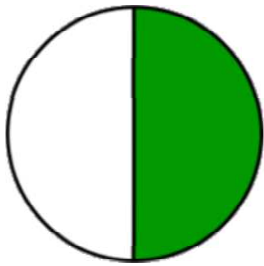
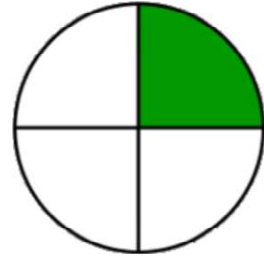


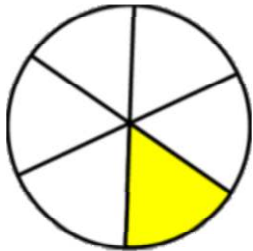
Writing fractions

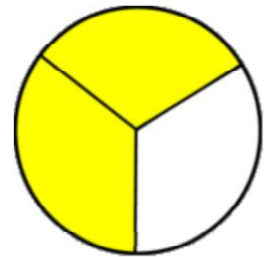
Grade 1 Fractions Worksheet

Write the fraction of the shape that is filled in.

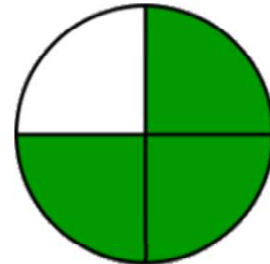


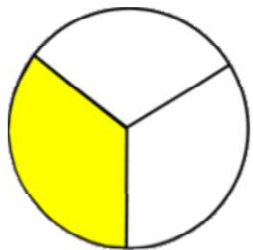
$$\frac{\boxed{1}}{\boxed{\quad}}$$


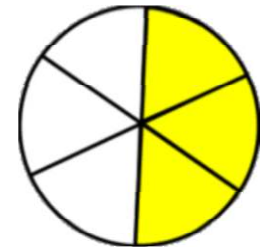
$$\frac{\boxed{\quad}}{\boxed{\quad}}$$


$$\frac{\boxed{\quad}}{\boxed{6}}$$


$$\frac{\boxed{\quad}}{\boxed{\quad}}$$


$$\frac{\boxed{\quad}}{\boxed{\quad}}$$


$$\frac{\boxed{\quad}}{\boxed{\quad}}$$


$$\frac{\boxed{\quad}}{\boxed{\quad}}$$


$$\frac{\boxed{\quad}}{\boxed{\quad}}$$